


1 – Écris les nombres dictés dans chaque case.



--	--	--	--	--	--	--	--	--

2 – Relie chaque collection au bon nombre.




23

25



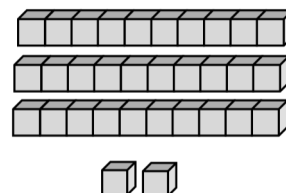
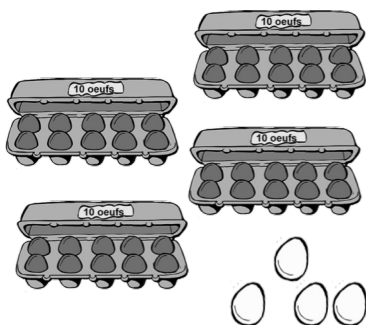
32

31

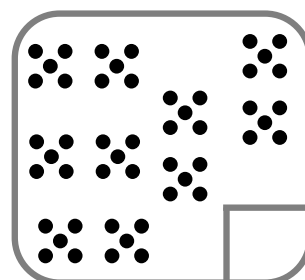
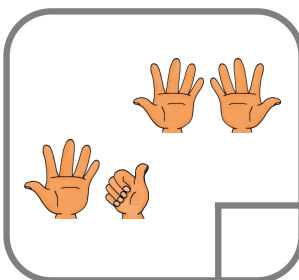

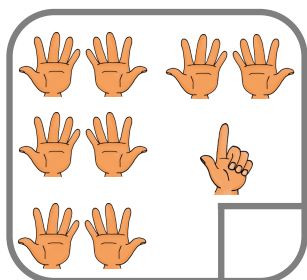


62

44



3 – Écris le nombre représenté sur chaque carte.



4 – Dessine la collection bien organisée sur chaque carte.

--

27

--

8

--

31


--

15

1 - Écris les nombres dictés dans chaque case.


--	--	--	--	--	--	--	--	--

2 - Relie chaque collection au bon nombre.



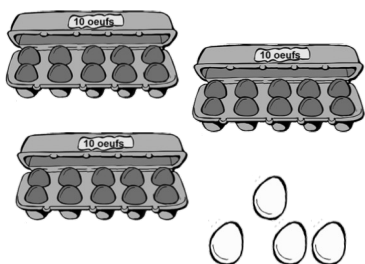
28

34



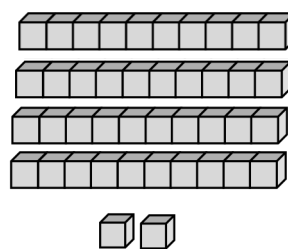


21

38


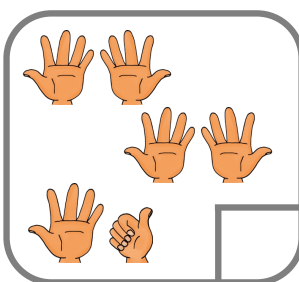

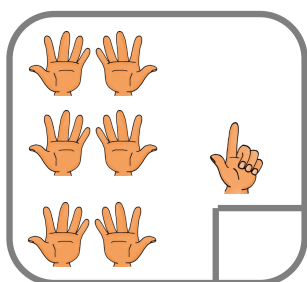


42

52



3 - Écris le nombre représenté sur chaque carte.



4 - Dessine la collection bien organisée sur chaque carte.

--

36

--

20


--

41

--

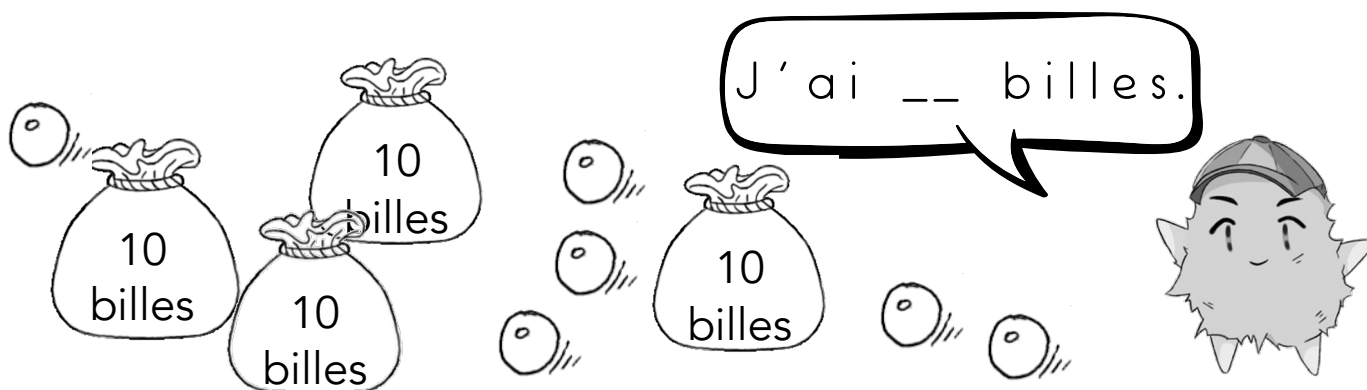
12

1 – Combien y a-t-il de mouches?



XXXIV

2 – Complète ce que dit Tic.



3 – Devinette

Il y a 4 dizaines et 7 unités.

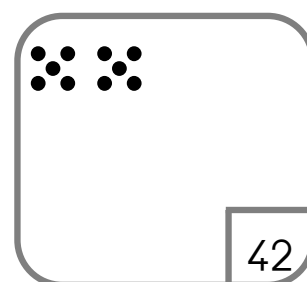
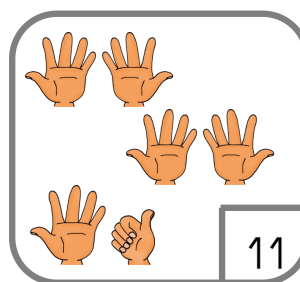
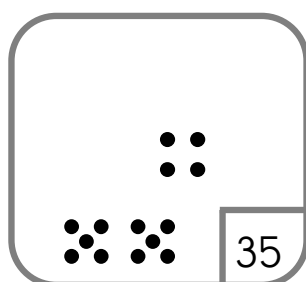
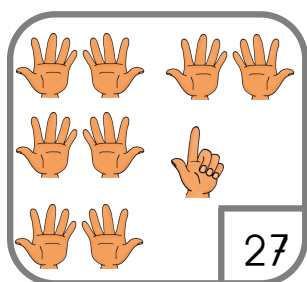
C'est _____.

4 – Devinette

Il y a 2 unités et 5 dizaines.

C'est _____.

5 – Ajuste chaque carte.



6 – Colorie de la même couleur les étiquettes du même nombre.

2d et 3u

23

trente-deux

20+3

32

cinquante-six

2+30


56

3d et 2u

vingt-trois

5d et 6u


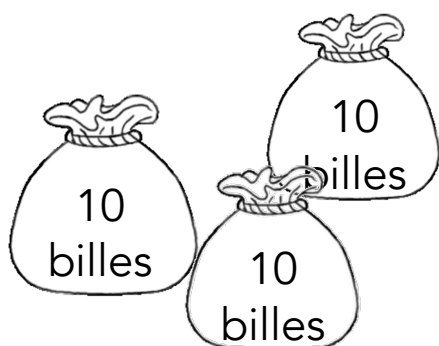
1 - Combien y a-t-il de mouches?



XXXVI



2 - Complète ce que dit Tic.



J'ai __ billes.



3 - Devinette

Il y a 2 dizaines et 4 unités.

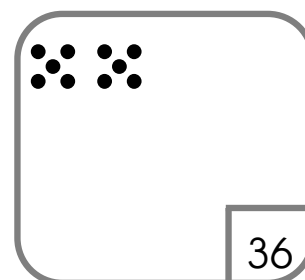
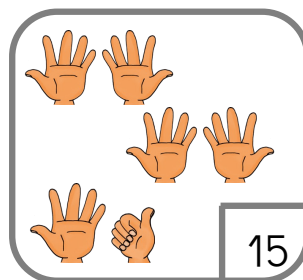
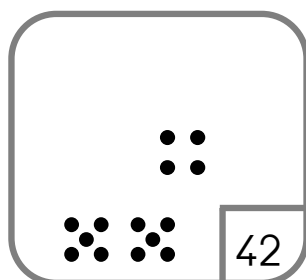
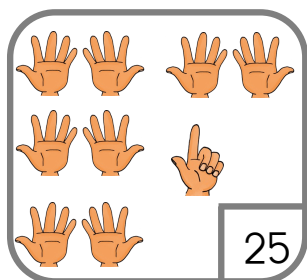
C'est _____.

4 - Devinette

Il y a 3 unités et 1 dizaine.

C'est _____.

5 - Ajuste chaque carte.



6 - Colorie de la même couleur les étiquettes du même nombre.

2d et 4u

24

quarante-deux

20+4

42

soixante-trois

2+40


63

4d et 2u


vingt-quatre

6d et 3u


1 – Combien y a-t-il d'ampoules ?



2 – Combien y a-t-il d'œufs ?



3 – Combien y a-t-il d'araignées ?



4 – Devinette

Il y a 6 dizaines et 5 unités.
C'est ____ .

5 – Devinette

Il y a 4 unités et 1 dizaine.
C'est ____ .

6 – Devinette


Il y a 3 dizaines et pas d'unité.
C'est ____ .

7 – Devinette

Il y a 8 unités.
C'est ____ .




1 – Combien y a-t-il d'ampoules ?




XXXI

2 – Combien y a-t-il d'œufs ?



XLVIII

3 – Combien y a-t-il d'araignées ?



XXVI

4 – Devinette

Il y a 5 dizaines et 6 unités.
C'est ____ .

5 – Devinette

Il y a 3 unités et 1 dizaine.
C'est ____ .

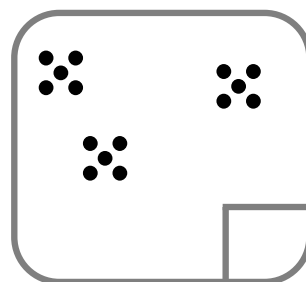
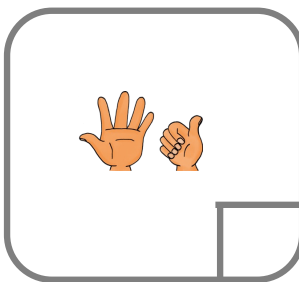

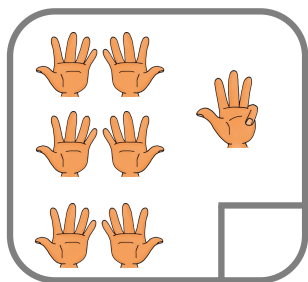
6 – Devinette

Il y a 6 dizaines et pas d'unité.
C'est ____ .



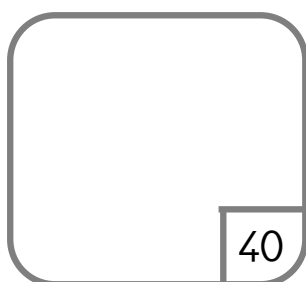
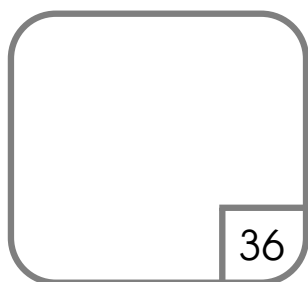
7 – Devinette

Il y a 2 unités.
C'est ____ .

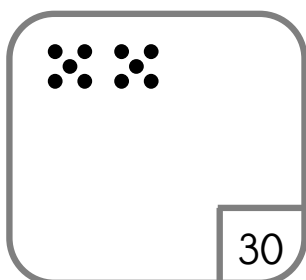
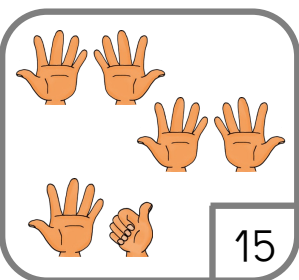
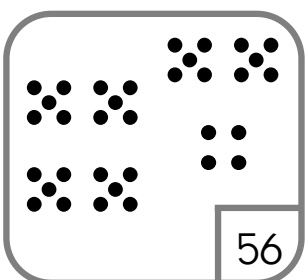
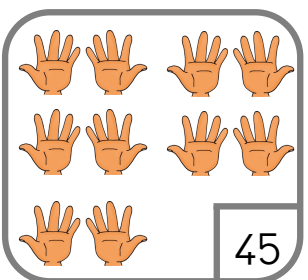
1 – Écris le nombre représenté sur chaque carte.



2 – Dessine la collection sur chaque carte.



3 – Ajuste chaque carte.



4 – Colorie de la même couleur les étiquettes du même nombre.

4d et 4u

14

soixante-et-un

40+4

61

60+1

44

quatorze

10+10+10+10+10+10+1

10+4

10+10+10+10+4

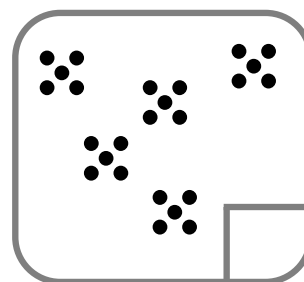
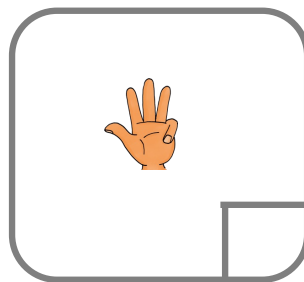
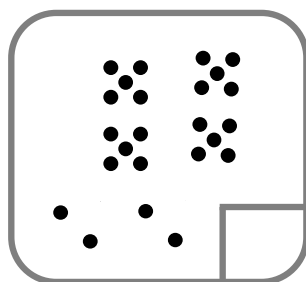
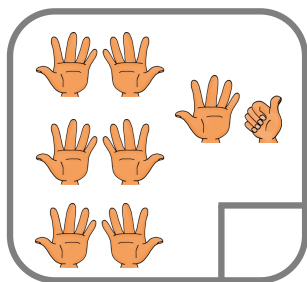
quarante-quatre

1d et 4u

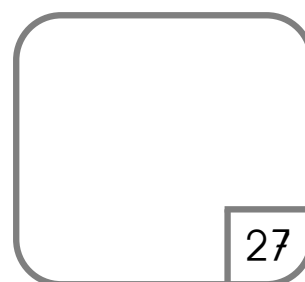
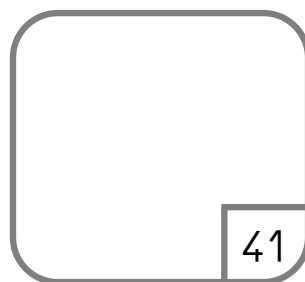
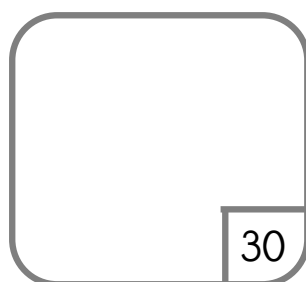

6d et 1u




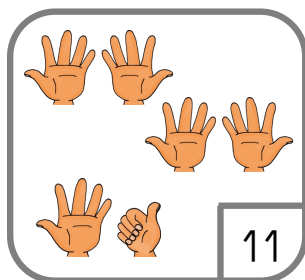
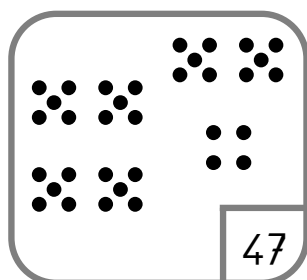
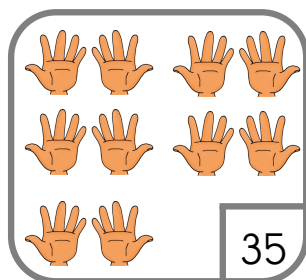
1 – Écris le nombre représenté sur chaque carte.



2 – Dessine la collection sur chaque carte.



3 – Ajuste chaque carte.



4 – Colorie de la même couleur les étiquettes du même nombre.

4d et 6u

15

cinquante-et-un

$40+6$

51

$50+1$

46

quinze

$10+10+10+10+10+1$

$10+5$

$10+10+10+10+6$

quarante-six

1d et 5u

5d et 1u